

Şekil Sayı Eşleştirme

×

= 7

□

= 1

○

= 5

◇

= 2

+

= 3

▽

= 8

☆

= 4

△

= 9

→

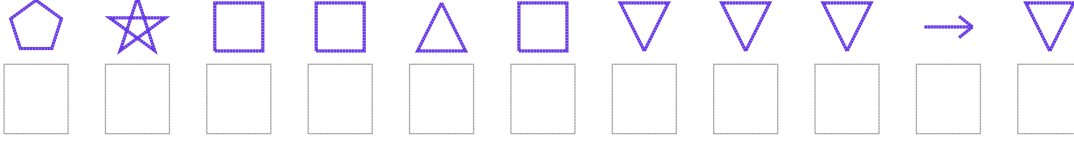
= 6

⬠

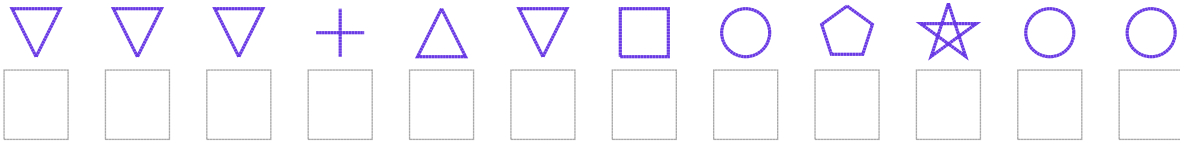
= 0

Aşağıdaki uzun şifreleri hatasız çözerek altlarına yazın:

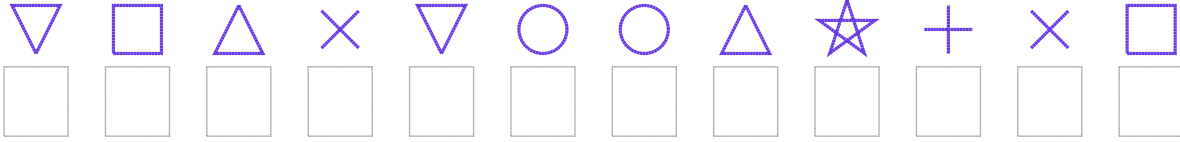
1. Şifre



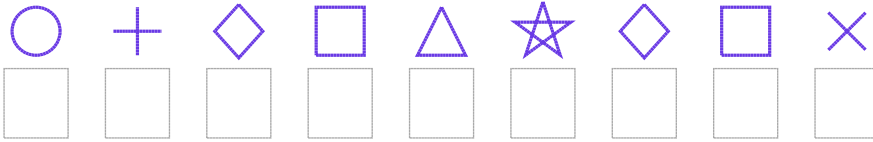
2. Şifre



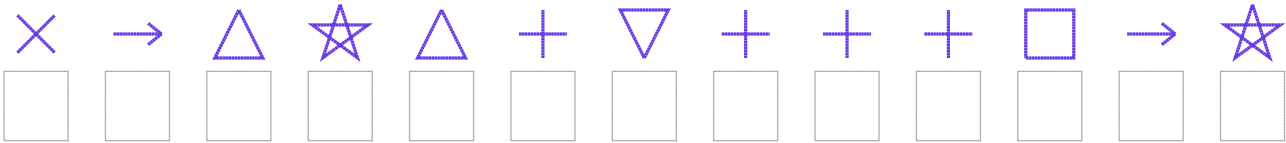
3. Şifre



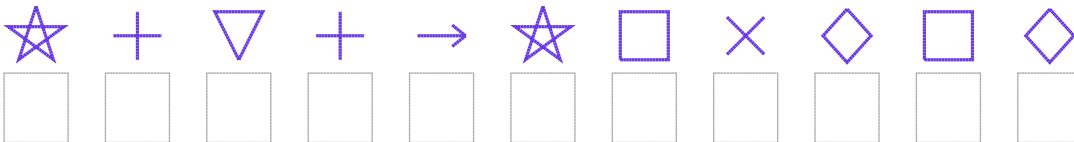
4. Şifre



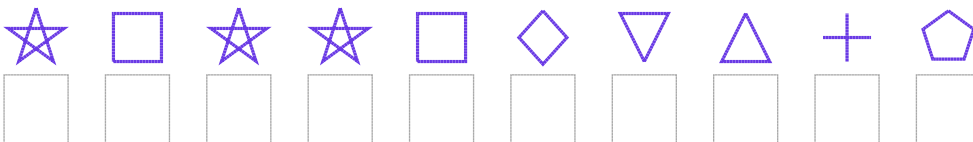
5. Şifre



6. Şifre



7. Şifre



□ BONUS: 2. ve 6. şifrenin ikinci rakamının toplamı kaçtır?

Cevap Anahtarı

1. Şifre: 04119188868
2. Şifre: 888398150455
3. Şifre: 819785594371
4. Şifre: 532194217
5. Şifre: 7694938333164
6. Şifre: 43836417212
7. Şifre: 4144128930

□ Bonus Soru Cevabı: 11